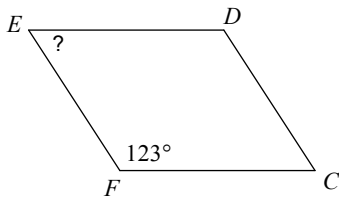


Review - Quadrilaterals & Their Properties

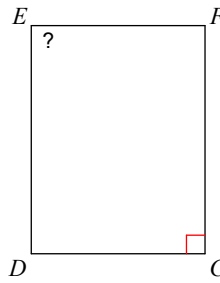
© 2011 Kuta Software LLC. All rights reserved.

Find the measurement indicated in each parallelogram.

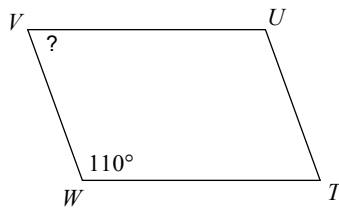
1)



2)

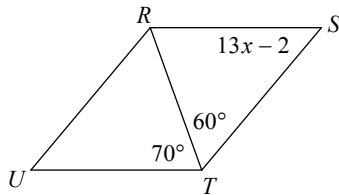


3)

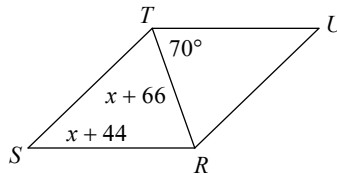


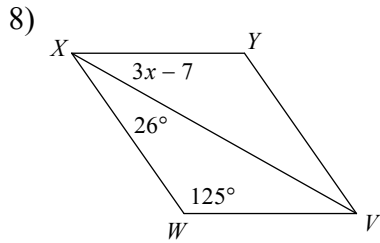
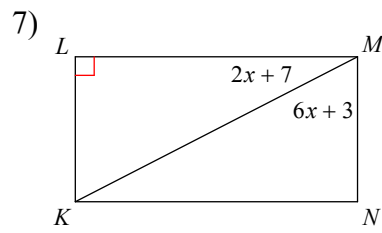
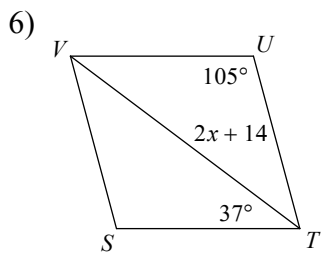
Solve for x . Each figure is a parallelogram.

4)



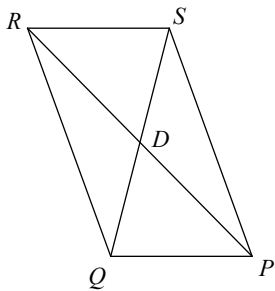
5)



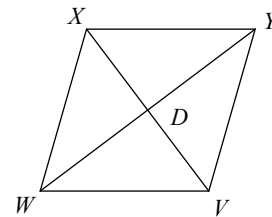


Find the measurement indicated in each parallelogram.

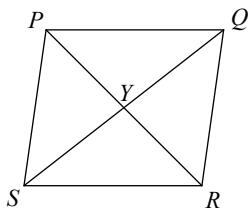
- 9) $QD = -3 + x$
 $DS = 2x - 15$
 Find QD



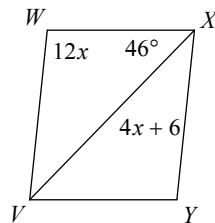
- 10) $WD = x + 1$
 $DY = -7 + 2x$
 Find WY



- 11) $QY = 4x - 3$
 $YS = 3x$
 Find QY

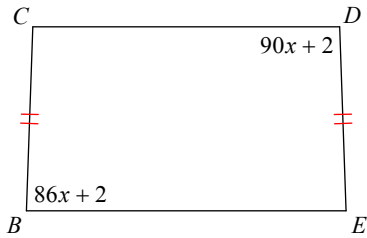


- 12) Find $m\angle WXY$




Find the length of the angle indicated for each trapezoid.

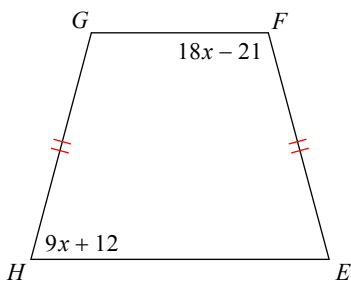
13) Find $m\angle C$



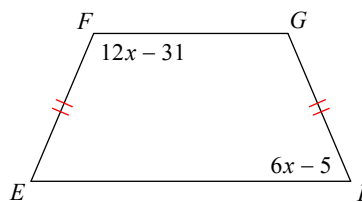
14) Find $m\angle V$



15) Find $m\angle G$

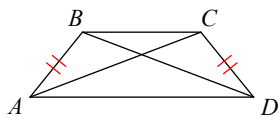


16) Find $m\angle H$

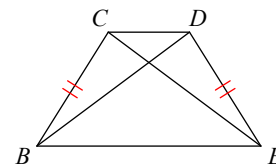


Find the length of the diagonal indicated for each trapezoid.

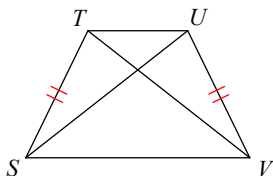
17) $AC = 4x - 30$
 $BD = x + 3$
 Find AC



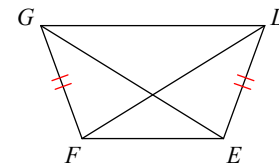
18) $CE = -4 + 2x$
 $BD = 3x - 9$
 Find CE



19) $TV = 22x$
 $SU = 19x + 3$
 Find TV



20) $DF = 4x - 1$
 $EG = 5x - 6$
 Find DF



Answers to Review - Quadrilaterals & Their Properties

1) 57°

2) 90°

3) 70°

4) 4

5) 0

6) 12

7) 10

8) 12

9) 9

10) 18

11) 9

12) 84°

13) 92°

14) 88°

15) 105°

16) 67°

17) 14

18) 6

19) 22

20) 19